



**TERM 1**  
**Task Sheet 2021-2022**

<b>Subject</b>	Math	<b>Date</b>		<b>Roll No.</b>	
<b>Name</b>				<b>Grade/Section</b>	1 ____


**Task 1: Skip Count up the strawberries and fill in the missing numbers:**




Skip count by 2



Skip count by 5



Skip count by 10



## Task 2: Complete the missing number

Skip count to find the total number of flowers.

5



Skip count to find the total number of shoes.

2



Skip count to find the total number of jellybeans.

10



## Task 3: Skip Counting word problems.

1. Tim has four bins of cars.

Each bin has ten cars.

How many cars are there in his bins?

2. I saw five nests on a tree.

There were two eggs in each nest.

How many eggs did I see?