

Name: _____ KG2 _____

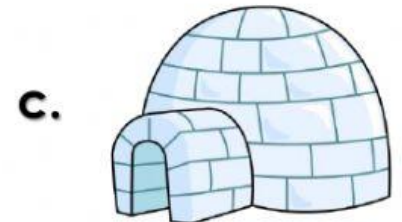
1. Which is a hard object?




2. Which is a rough object?




3. Which is a soft object?



4. Which is a smooth object?



Tick the correct surfaces in the box.

☐☐


soft

☐☐

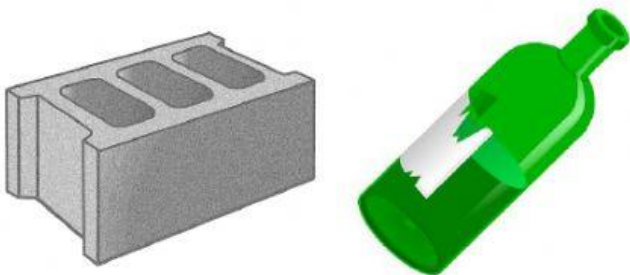
smooth

☐☐

hard

☐☐

rough

☐☐

smooth

☐☐

soft