

EQUIVALENT FRACTIONS



PART II

PIZZA FRACTIONS



A 3x3 grid of pizza fraction problems. Each problem consists of a pizza circle divided into a certain number of slices, with some slices shaded to represent a fraction. Below each pizza is a starburst shape.

- Row 1, Column 1: A pizza divided into 6 equal slices, with 4 slices shaded. Below it is a green starburst.
- Row 1, Column 2: A pizza divided into 8 equal slices, with 7 slices shaded and 1 slice missing. Below it is a light green starburst.
- Row 1, Column 3: A pizza divided into 3 equal slices, with 2 slices shaded. Below it is a red starburst.
- Row 2, Column 1: A pizza divided into 2 equal halves, with 1 half shaded. Below it is a purple starburst.
- Row 2, Column 2: A pizza divided into 4 equal quadrants, with 3 quadrants shaded. Below it is a light green starburst.
- Row 2, Column 3: A pizza divided into 8 equal slices, with 6 slices shaded and 2 slices missing. Below it is a grey starburst.

EQUIVALENT FRACTIONS



1															
$\frac{1}{2}$								$\frac{1}{2}$							
$\frac{1}{4}$				$\frac{1}{4}$				$\frac{1}{4}$				$\frac{1}{4}$			
$\frac{1}{8}$		$\frac{1}{8}$		$\frac{1}{8}$		$\frac{1}{8}$		$\frac{1}{8}$		$\frac{1}{8}$		$\frac{1}{8}$		$\frac{1}{8}$	
$\frac{1}{1}$ 6	$\frac{1}{1}$ 6	$\frac{1}{1}$ 6	$\frac{1}{1}$ 6	$\frac{1}{1}$ 6	$\frac{1}{1}$ 6	$\frac{1}{1}$ 6	$\frac{1}{1}$ 6	$\frac{1}{1}$ 6	$\frac{1}{1}$ 6	$\frac{1}{1}$ 6	$\frac{1}{1}$ 6	$\frac{1}{1}$ 6	$\frac{1}{1}$ 6	$\frac{1}{1}$ 6	$\frac{1}{1}$ 6

$\frac{1}{2} = \frac{\quad}{8}$

$\frac{1}{4} = \frac{\quad}{16}$

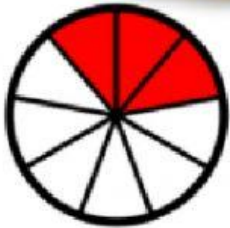
$\frac{2}{4} = \frac{\quad}{2}$

$\frac{4}{8} = \frac{\quad}{16}$


$\frac{3}{4} = \frac{\quad}{8}$



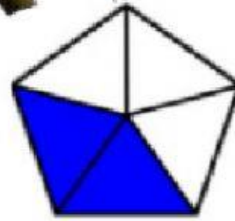
EQUIVALENT FRACTIONS



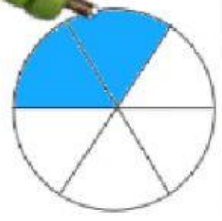
A



B



C



D

WRITE THE FRACTION UNDER EACH SHAPE.

WHICH SHAPE CAN NOT BE X BY 3 TO MAKE 1 WHOLE ?

WHICH SHAPE IS THE ODD ONE OUT?

