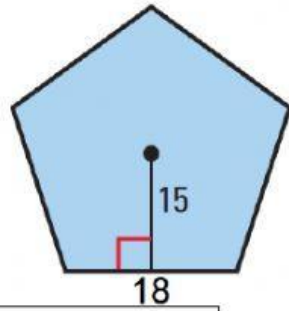
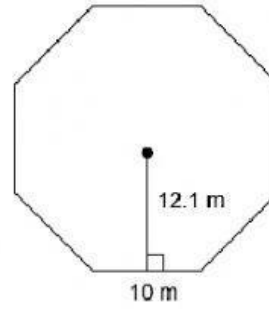


Find the area and perimeter of the following regular polygons



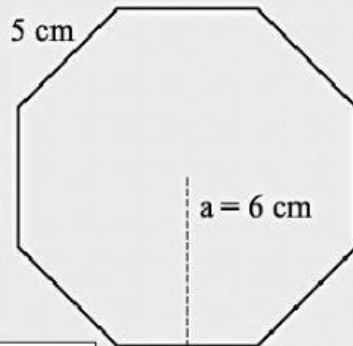
Perimeter:                  units

Area:                  square units



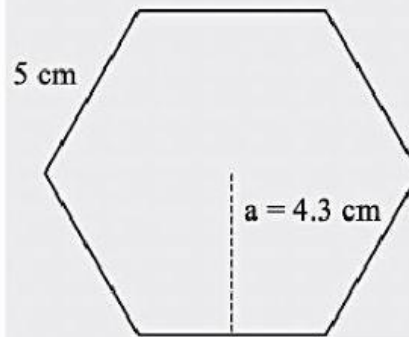
Perimeter:                  m

Area:                  m<sup>2</sup>



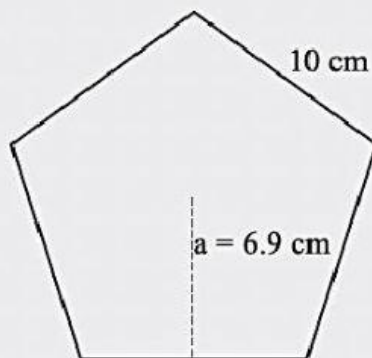
Perimeter:                  cm

Area:                  cm<sup>2</sup>



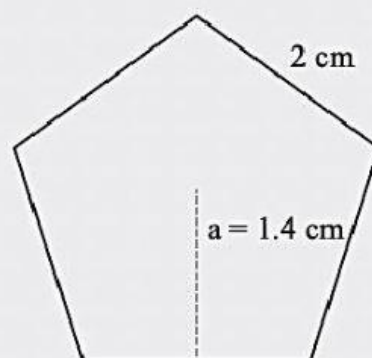
Perimeter:                  cm

Area:                  cm<sup>2</sup>



Perimeter:                  cm

Area:                  cm<sup>2</sup>



Perimeter:                  cm

Area:                  cm<sup>2</sup>