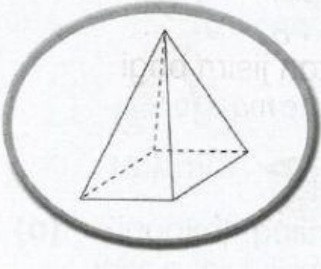


## SHAPES

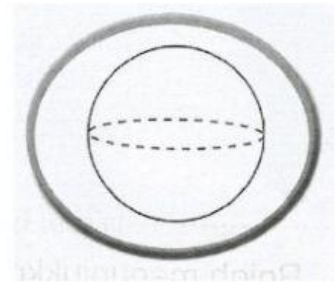
Choose the correct answer.

1.

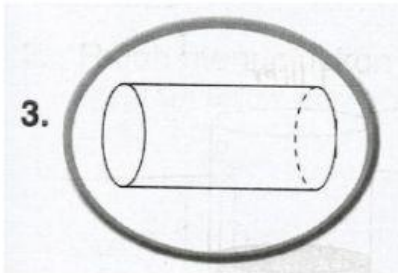


This shape has \_\_\_\_\_ face.

2. This shape has \_\_\_\_\_.



3.

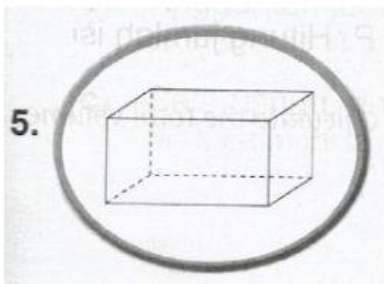


This shape has \_\_\_\_\_ flat faces and  
\_\_\_\_\_ curved face.

4. This shape has \_\_\_\_\_ curved face  
and \_\_\_\_\_ flat face.

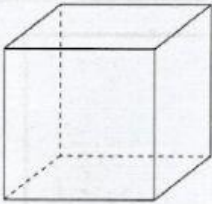
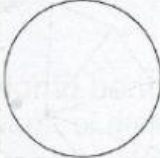




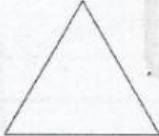

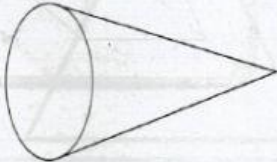











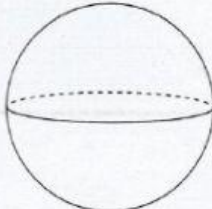





5.



This shape has \_\_\_\_\_ flat faces.

Tick (/) at the basic shape for every 3D shapes.

1.		 ( )	 ( )	 ( )
2.		 ( )	 ( )	 ( )
3.		 ( )	 ( )	 ( )
4.		 ( )	 ( )	 ( )
5.		 ( )	 ( )	 ( )
6.		 ( )	 ( )	 ( )