

Chủ đề

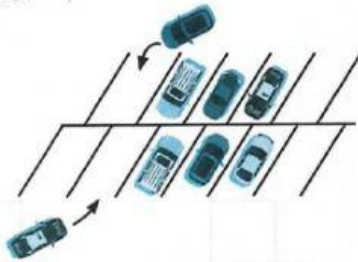
3

Cộng bằng cách đếm thêm



1 Viết phép cộng (theo mẫu).

Mẫu:



$$3 + 2 = 5$$

$$0 + 0 = 0$$

$$6 + 2 = 8$$

a)

.....
-------	-------	-------	-------

b)

.....
-------	-------	-------	-------

c)

.....
-------	-------	-------	-------

d)

.....
-------	-------	-------	-------

2 Tính:

$3 + 1 = \dots\dots\dots$

$6 + 3 = \dots\dots\dots$

$3 + 7 = \dots\dots\dots$

$4 + 3 = \dots\dots\dots$

$2 + 8 = \dots\dots\dots$

$3 + 3 = \dots\dots\dots$

$4 + 6 = \dots\dots\dots$

$1 + 6 = \dots\dots\dots$

$4 + 1 = \dots\dots\dots$


$3 + 5 = \dots\dots\dots$

$5 + 4 = \dots\dots\dots$


$2 + 6 = \dots\dots\dots$

3 Viết phép tính (theo mẫu).

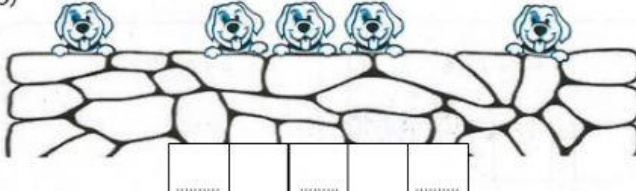
Mẫu:




a)



b)



c)



4

Tính:

$8 + 1 + 1 = \dots\dots$

$4 + 3 + 2 = \dots\dots$

$6 + 1 + 2 = \dots\dots$

$2 + 6 + 1 = \dots\dots$

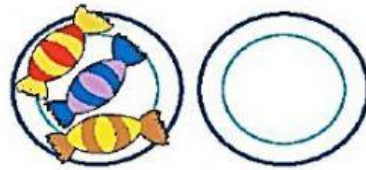
5



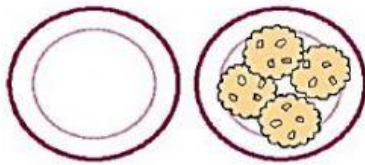
a



$3 + 1 = \dots$



$3 + 0 = \dots$



$0 + 4 = \dots$

b

$1 + 0 = \dots$

$0 + 3 = \dots$

$0 + 0 = \dots$