


3-digit Numbers

Complete the place-value chart. Then write the numbers.

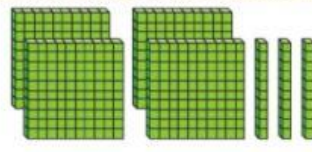
1.



Hundreds	Tens	Ones
3		

The 3 has the value of _____ hundreds or _____.

2.



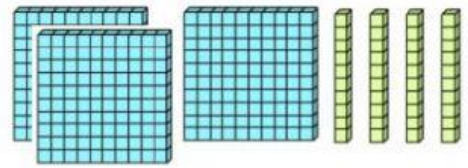
Hundreds	Tens	Ones
	3	

The 3 has the value of _____ tens or _____.

3. Circle the correct answer.

John uses models to show a 3-digit number.

What is the expanded form of his number?



A. 304

B. $300 + 4$

C. $300 + 40$

D. 340

4. Write the number. Use the place-value chart if needed.

Linda thinks about a 3-digit number.

The **hundreds** digit has the value of 700.

The **tens** digit has the value of 6 tens.

The **ones** digit has the value of 3.

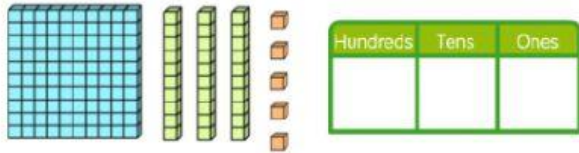
What is Linda's number?

Linda's number is _____.



Write the numbers in the place-value chart. Then write the numbers in 3 forms.

5.

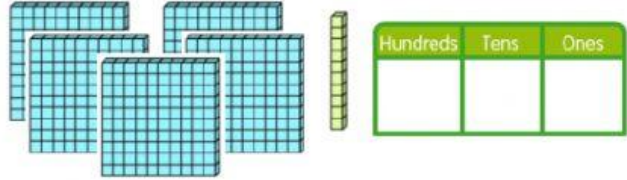


Number form: _____

Word form: _____

Expanded form: _____

6.



Number form: _____

Word form: _____

Expanded form: _____