


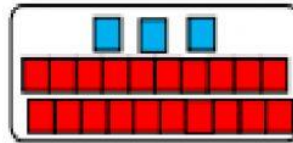
Tarea #5 Decenas y Unidades.

Cuenta las decenas y Unidades y une con el número que representa:

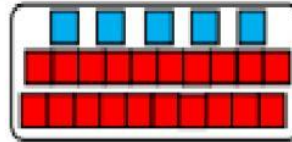
21




27



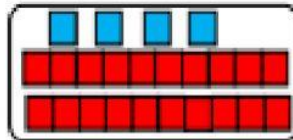
23



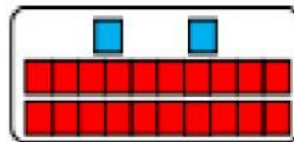
25



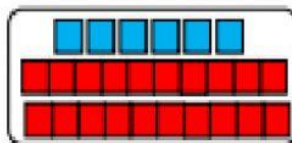
24



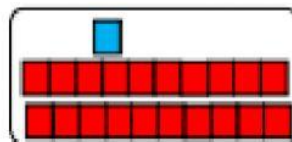
22



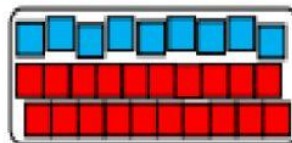
20



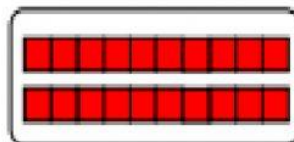
28



29



26



- Escribe las *Decenas* y *Unidades* en la que se descompone cada cantidad:

$45 = \square \text{ D } \square \text{ U}$

$32 = \square \text{ D } \square \text{ U}$

$25 = \square \text{ D } \square \text{ U}$

$16 = \square \text{ D } \square \text{ U}$

$58 = \square \text{ D } \square \text{ U}$

$29 = \square \text{ D } \square \text{ U}$

$12 = \square \text{ D } \square \text{ U}$

$36 = \square \text{ D } \square \text{ U}$

$53 = \square \text{ D } \square \text{ U}$