



UNIT 6: PERIMETER AND AREA

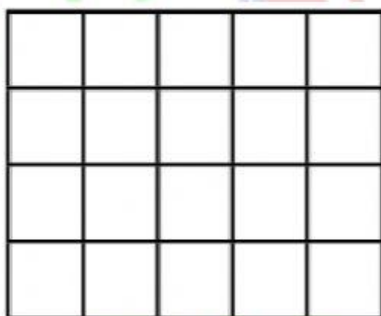
Lesson 2: Area

II. Vocabulary


English words	Meaning
Area	Diện tích
Square unit	Đơn vị diện tích
Width	Chiều rộng
Length	Chiều dài

III. Practice


1. Determine the area of each shape of counting the number of squares.




a. The area of this shape is
..... square units.



b. The area of this shape is
..... square units.



c. The area of this shape is
..... square units.



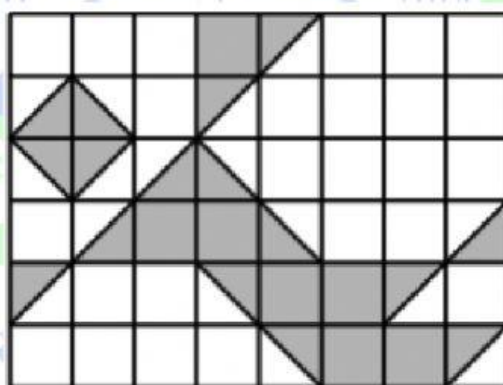
d. The area of this shape is
..... square units.

2. Work out the area of the following shapes.

No	Question	Answer
1	A rectangle measuring 7cm by 4cm.	Area =cm ² .
2	A square with sides of 10cm.	Areacm ² .
3	A rectangle with sides of 11cm and 16cm.	Area = cm ² .
4	A square with sides of 9mm.	Area =mm ² .

3. (IMAS 2012 – Round 2)

In the 6×8 square grid, each square is 1cm^2 , what is the shaded area, in 1cm^2 .



Answer:cm².