

Grade 2
End of Term
Christmas Term 2021
Math Concept Examination
25 total points

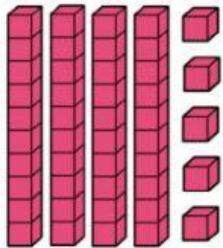

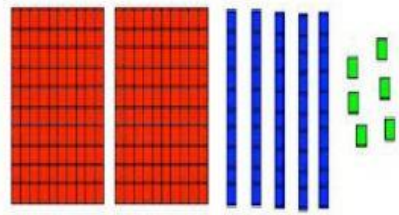
Name: _____

Teacher: _____

Section A:

Place Value (4 pts. total)

What number do the blocks show?

	<input type="text"/>		<input type="text"/>
			
<input type="text"/>			

Section B

Comparing Numbers (3 pts.)

Place the correct symbol in the circle $>$, $<$, and $=$

46 64

351 151

206 206

Section C

Ordering Numbers (6 pts.)

Put this list of numbers in ascending order.

56 23 72

--	--	--



Put this list of numbers in descending order.


74 35 63

--	--	--


Section D

Even and Odd Numbers (4 pts.)


Click on all the even numbers




182



206

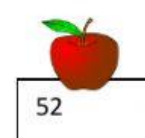


17




203


Click on all the odd numbers




52



2 889



360



233

Section E

Patterns (4 pts.)

Complete each pattern.

2, ____ 6, 8 ____ 12


Drag and drop to complete the pattern.



Section F

Ordinal Numbers (5pts.)

Drag and drop the ordinal positions under the correct names.



Below the names are two rows of boxes for ordinal numbers. The first row contains: [], second, [], fourth, [], sixth, [], eighth, [], tenth. The second row contains: first, seventh, ninth, third, fifth.