

Mathematics.

1. Which object is a square?



2. Choose the correct bills to pay for the bread.



3. Which set has **less** objects?




4. Count the objects. Circle the correct answer.



a. 3

b. 5

c. 4

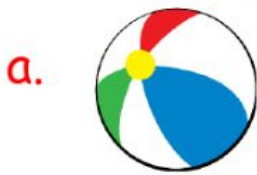
5.  What is my word name?

a. two

b. three

c. five

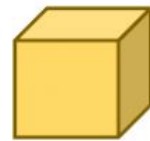
6. Which object looks like a can?



b.



c.



7. Who is taller?




a.



b.

8. Which object is **heavier**?



a.



b.



9. Which shape has three sides?

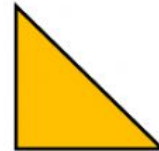
a.



b.



c.

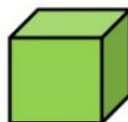


10. Which solid shape has rectangular faces?

a.



b.



c.

