

MATHS BEE (November)
DLDAV MODEL SCHOOL
SESSION 2021-22
CLASS - II

Date: 29.11.2021

Q1.Fill in the blanks:

a. $100p + 50p + 30p = \underline{\hspace{2cm}}p$

b. $356 - 223 = \underline{\hspace{2cm}}$

c. ₹ 1 = $\underline{\hspace{2cm}}$ p

d. ₹50 + ₹50 + ₹50 = ₹ $\underline{\hspace{2cm}}$

e. Ten notes of ₹10 makes= ₹ $\underline{\hspace{2cm}}$

Q2 There are 160 oranges and 80 apples in the kitchen.How many more oranges than apples are there = $\underline{\hspace{2cm}}$

Q3 Choose the correct option:-

a. _____ - 7 = 3

11 , 10 , 3 , 15

b. 75 _____ 60 + 5

< , = , >






c. _____ 50 paisa coins makes 1 rupee.

3 , 1 , 2 , 4

d. How many 10 rupee notes will make a total of ₹70 ?

6 , 8 , 7 , 10

Q4. Find out the money spent and money left:-

		
₹20.10	₹88.00	₹35.00
		
₹ 27.00p	₹10.50p	

a.) Tina had ₹100. She bought an ice-cream and bread. How much money did she spend?

₹ _____

b.) Ram had ₹135 .He bought a shampoo and cap. How much money is left with him?

₹ _____

Q5 Write True or False for the following statements :-

a.) $800 + 60 - 4 = 856$ _____

b.) Fifteen rupees and fifty paise = ₹50.15p

c.) $100 - 6 < 98$ _____

d.) Milk for ₹18.00p and soap for ₹8.20p makes a bill of ₹26.20p _____

e.) Two coins of 50p makes ₹1.50p

Q6. A bakery shop had 359 cakes in the morning. It sells 269 cakes. How many cakes are left in the evening?

Q7 Complete the series:-

590, _____ , _____, _____, 586, _____, _____