



NAME :


SECTION :


ROLL No.

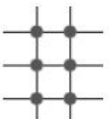
Q. Fill in the blanks by looking at the following diagrams:

(a)  _____ × _____ = _____

(b)  _____ × _____ = _____

(c)  _____ × _____ = _____


(d)  _____ × _____ = _____


(e)  _____ × _____ = _____


(f)  _____ × _____ = _____

(g)  _____ × _____ = _____


(h)  _____ × _____ = _____

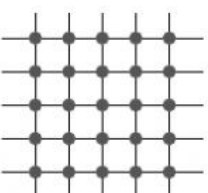
(i)  _____ × _____ = _____

(j)  _____ × _____ = _____

(k)  _____ × _____ = _____

(l)  _____ × _____ = _____

(m)  _____ × _____ = _____

(n)  _____ × _____ = _____