

# NINE TIMES TABLE DRAW A LINE 1



Draw a line between the factors and

product (Answer)

$9 \times 0 =$

36

$9 \times 1 =$

0

$9 \times 2 =$

72

$9 \times 3 =$

45

$9 \times 4 =$

54

$9 \times 5 =$

63

$9 \times 6 =$

99

$9 \times 7 =$

27

$9 \times 8 =$

108

$9 \times 9 =$

18

$9 \times 10 =$


90

















$9 \times 11 =$

81

$9 \times 12 =$

9



						
$9 \times 0$	$9 \times 1$	$9 \times 2$	$9 \times 3$	$9 \times 4$	$9 \times 5$	$9 \times 6$
			9	27	99	0
$9 \times 7$	$9 \times 8$	$9 \times 9$	108		36	
			45	18	54	72
$9 \times 10$	$9 \times 11$	$9 \times 12$	63		81	90

What's blue and has big ears?  
An elephant at the South Pole