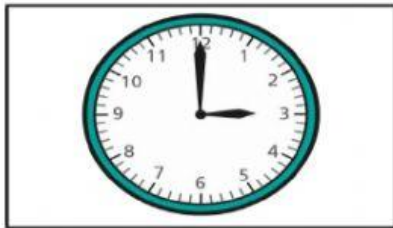




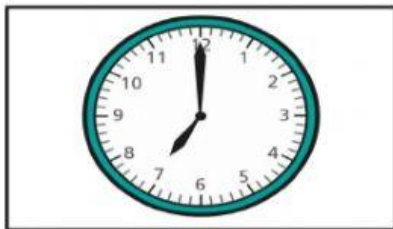
Sarasas Witaed Ratchaphuek Schools
Academic Year 2021-2022
Bilingual Program
Grade 2
MATH

NAME: _____ Grade: _____ No. _____

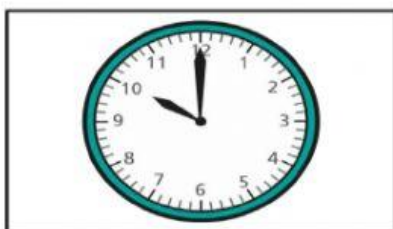
1 Match the clocks to the times.



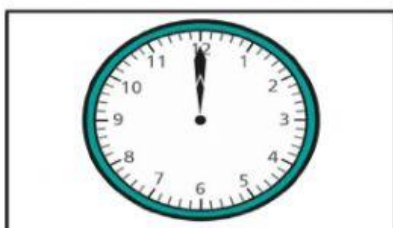
7 o'clock



3 o'clock



12 o'clock



10 o'clock

Complete the sentence.

At o'clock, the minute hand points to