

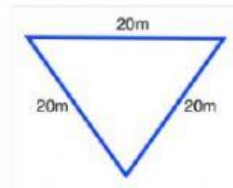
KINGDOM OF BAHRAIN
NEW GENERATION PRIVATE SCHOOL
S.Y. 2021 – 2022
Mathematics Exam Practice Sheet

Name: _____ Class: Grade: 5 Date: _____

Answer All Questions

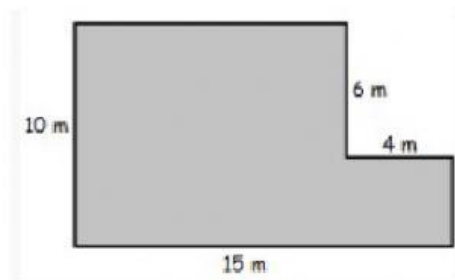
Chapter 4: Area and Perimeter

22. What is the perimeter?

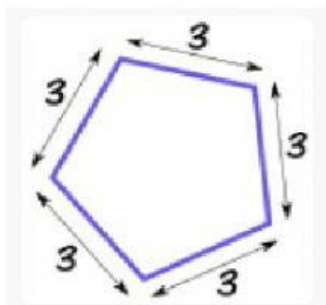


23. The distance around an object is called the _____

24. Find the perimeter ?

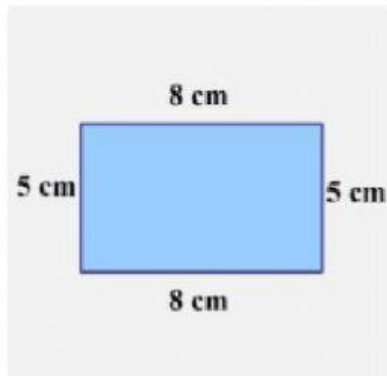


25. Find the perimeter of the shape below



KINGDOM OF BAHRAIN
NEW GENERATION PRIVATE SCHOOL
S.Y. 2021 – 2022
Mathematics Exam Practice Sheet

26. A perimeter of a rectangle is 20 meters. The width is 4 meters. What would the length be?
27. What is the formula for finding area of a rectangle?
28. What is the area of the below rectangle ?



29. What is the area of the shaded region?

