







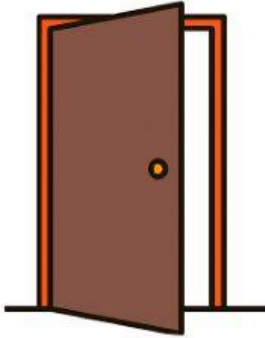





## Milliliters, Centimeters and Meters

Choose the best unit of measurement for each item below.

<p>Baby's feet</p>  <p>cm / mm / m</p>	<p>Length of a Dolphin</p>  <p>cm / mm / m</p>	<p>The size of a button</p>  <p>cm / mm / m</p>
<p>Height of a tree</p>  <p>cm / mm / m</p>	<p>Height of a man</p>  <p>cm / mm / m</p>	<p>A length of a letter on your book</p>  <p>cm / mm / m</p>
<p>Size of a frying pan</p>  <p>cm / mm / m</p>	<p>Length of a grain of rice</p>  <p>cm / mm / m</p>	<p>Height of a door</p>  <p>cm / mm / m</p>
<p>Length of a calendar</p>  <p>cm / mm / m</p>	<p>An apple seed</p>  <p>cm / mm / m</p>	<p>Length of a car</p>  <p>cm / mm / m</p>

Choose whether these statements are true or false

Your bedroom is less than 3 meters wide.	True / False
The chalkboard in your classroom is more than 10 meters long.	True / False
A broom stick is a little more than 1 meter long	True / False
One meter is longer than one centimeter	True / False
A laptop is less than a meter	True / False

Choose the correct option.

The length of a ruler is 30 cm. How many millimeters is that?

- a. 3 mm      b. 300 mm      c. 3,000 mm      d. 30, 000 mm

The length of a 2 cm. How many millimeters is that?

- a. 2 mm      b. 2.1 cm      c. 20 cm      d. 200 cm

Hannah's hand span is 80 mm. How many centimeters is that?

- a. 0.8 cm      b. 8 cm      c. 80 cm      d. 800 cm

Look at each length. Choose the longest length

1. 30 mm      300 cm  
2. 400 mm      4 cm