



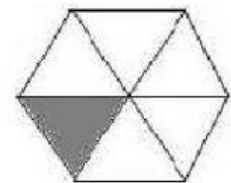
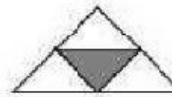

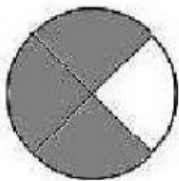


REPASSEM LES FRACCIONS

1. Expressa en forma de fracció:



2. Imagina una caixa de 16 bombons i completa amb lletres:

- $1/2$ de 16 bombons són.....bombons.
- $3/4$ de bombons són.....bombons.
- $5/8$ debombons són.....bombons.

—
—