

Mathematics Objective Type Test

**DIRECTION: Read each question and then
CIRCLE the correct answer.**


-  1. What is the name of the number in the box?

50

five

fifteen


fifty

-  2. Jane continues to count some balls like this: **21, 22, 24, 25, 26**. Which number did Jane leave out?


23

27

28

-  3. Which of the balloons has a number that is the same as seventy-one?



-  4. Which number below is the same as 4 tens and 5 ones?

504

54


45

 5. Which of these is equal to 89?

$8 + 9$

$80 + 9$

$800 + 9$

 6. What is the value of the 7 in 173?

700

70


7

 7. Which is the first counting number?

0

1

2

 8. Which of these shows the number 13?

tens	ones
I	III

tens	ones
III	I

tens	ones
II	III

9. Mark made 7 groups of ten with the marble in his jar. He had 8 marbles left over. How many marbles were in the jar?



78 87 187

10. The number 98 reads _____.

nine eight eighty-nine ninety-eight

11. What is the face value of the number 123?

23 123 132


12. Which set of numbers is in order from **smallest to largest**?
2, 12, 21 12, 2, 21 21, 12, 2

 **13.** What counting number comes right after 39?

38

40

41

 **14.** Carlos is 20 years old. His brother is 5 years older than he is. How old is his brother?

25

28

15

 **15.** Which number comes before 19?

18

20

21