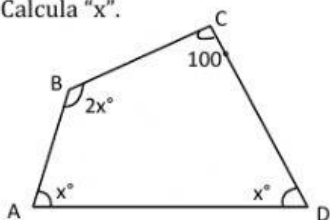
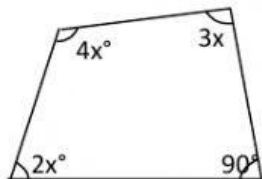


REPASO N°05 DE MATEMATICA LOS CUADRILATEROS

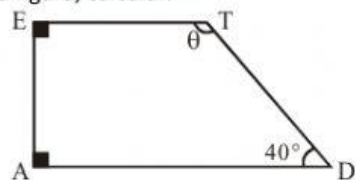
1).-Calcula "x".



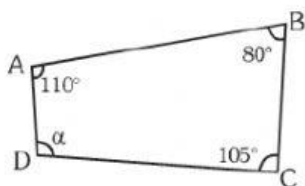
2. Calcula el complemento de "x".



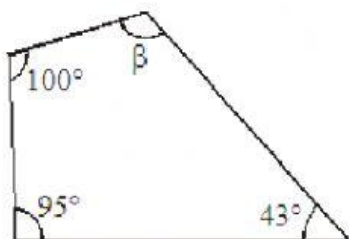
3. En la figura, calcular.



4. En la figura, hallar.



5 En la figura, calcular el valor de β .



6 Calcular el valor de α en :

