





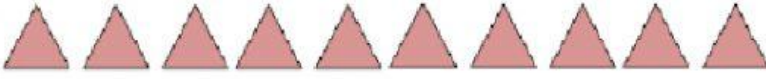


Name: _____

Date: _____

Subtraction Pictures 1

Using the coloured triangles find the sum of triangles left after subtracting the second number.

 $8 - 3 = \underline{\quad}$
 $6 - 5 = \underline{\quad}$
 $3 - 1 = \underline{\quad}$
 $5 - 2 = \underline{\quad}$
 $10 - 4 = \underline{\quad}$

