

Measuring Weight | kg and g

Measure the weight of each object.

1)



_____ g

2)




_____ kg

3)




_____ g

4)



_____ kg

5)



_____ g

6)




_____ kg

7)



_____ g

8)



_____ kg

9)



_____ g