







MATHEMATICS YEAR 1
MEASUREMENT
LENGTH, MASS AND VOLUME OF LIQUIDS




Solve these.



- 1 The volume of  is equal to 4 . The volume of  is equal to 6 . Which volume is more,  or  ?

- 2 Ramu pours a box of lychee juice into several glasses. Kiran drinks 1 glass. His friends drink 5 glasses. How many glasses a box of lychee juice can fill? glasses



- a Which is heavier, the newspapers or the books?

-  b How many  for the total mass of newspapers and the books? 

- 4 The length of the pencil case is equal to 5 .
The length of a pencil is equal to 4 .
Can the pencil be kept in the pencil case?

 because the pencil is than the pencil case.

