
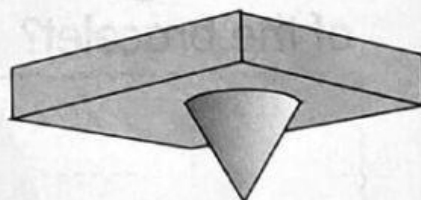
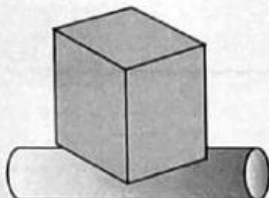





## SOLVE

### Activity 1

- 1 Tick (✓) the suitable model.



- 2 The shape has 4 corners. All its straight side is equal. What is the shape?




- 3 Raju wants to build a cube frame using the straws. How many straws does he need?







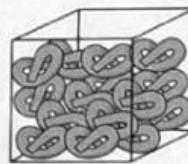
4 Sima made a bracelet with beads as shown below.



What do you think is the shape of the eleventh bead of the bracelet?

5 Elisa buys food in a cuboid container.

a Tick (✓) the food that she possibly buys.

☐☐☐

b Name the 2-D shape that forms when she traces the container.

