


- Triangolo o quadrilatero? Scegli per ciascuna figura la risposta corretta




☐ Triangolo
☐ Quadrilatero




☐ Triangolo
☐ Quadrilatero



☐ Triangolo
☐ Quadrilatero



☐ Triangolo
☐ Quadrilatero



☐ Triangolo
☐ Quadrilatero



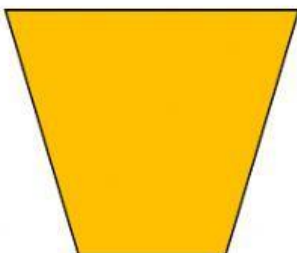
☐ Triangolo
☐ Quadrilatero




☐ Triangolo
☐ Quadrilatero



☐ Triangolo
☐ Quadrilatero



☐ Triangolo
☐ Quadrilatero



☐ Triangolo
☐ Quadrilatero