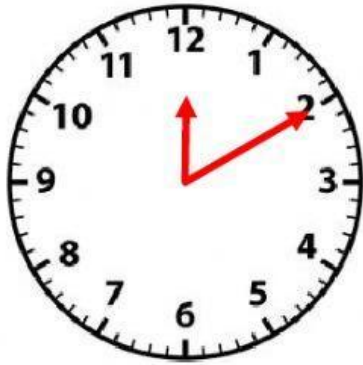


## Elapsed Time



Clock A

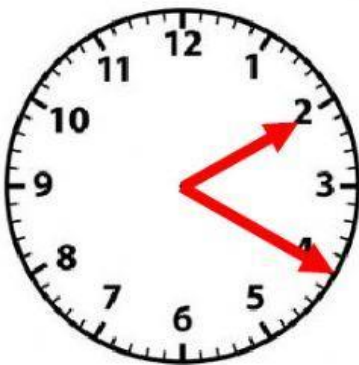


Clock B

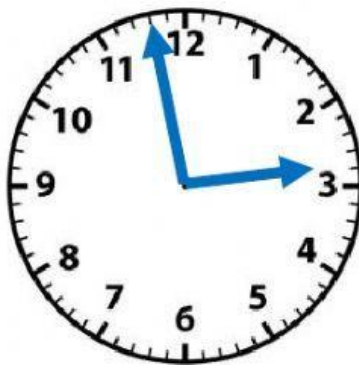
Clock A shows what time? \_\_\_\_\_

Clock B shows what time? \_\_\_\_\_

What is the Elapsed Time? \_\_\_\_\_ minutes



Clock A



Clock B

Clock A shows what time? \_\_\_\_\_

Clock B shows what time? \_\_\_\_\_

What is the Elapsed Time? \_\_\_\_\_ minutes



Clock A



Clock B

Clock A shows what time? \_\_\_\_\_

Clock B shows what time? \_\_\_\_\_

What is the Elapsed Time? \_\_\_\_\_ minutes