




UNIT 4: 10 TAKE AWAY

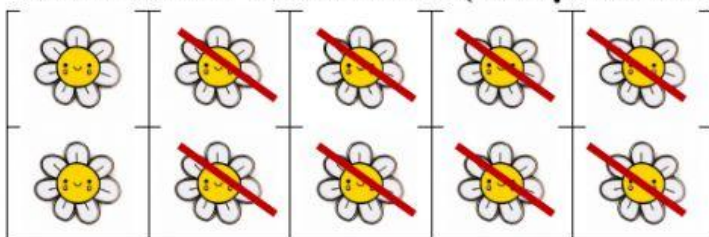
FIND THE MISSING NUMBERS (tìm và điền số vào chỗ trống)



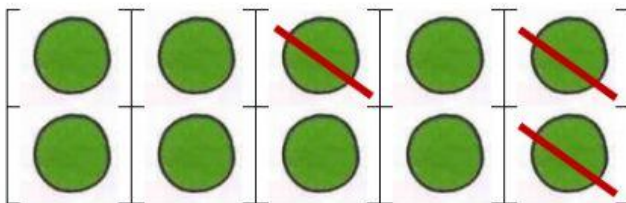
$$\begin{array}{r}
 1 \\
 - \\
 \hline
 \end{array}
 \begin{array}{r}
 3 \\
 - \\
 \hline
 \end{array}
 \begin{array}{r}
 5 \\
 - \\
 \hline
 \end{array}$$

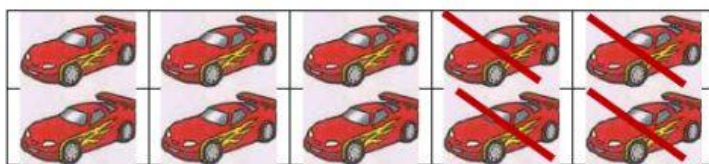
HOW MANY ARE LEFT? (còn lại bao nhiêu?)



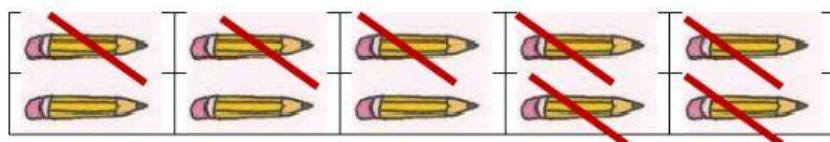
There are __ left.



There are __ left.






There are __ left.



There are __ left.

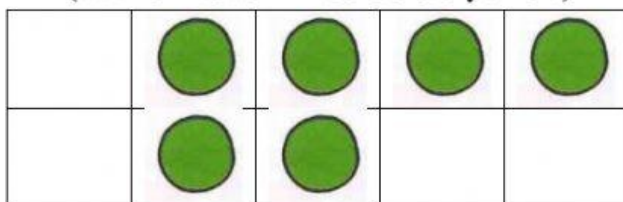
MS.YEN – ENGLISH

 135B/3 Le Quang Dinh, Thang Nhat Ward, Vung Tau city.
 0909.155.437 –  Ms.Yen – English/ Nguyen Ngo Yen Tuyet.

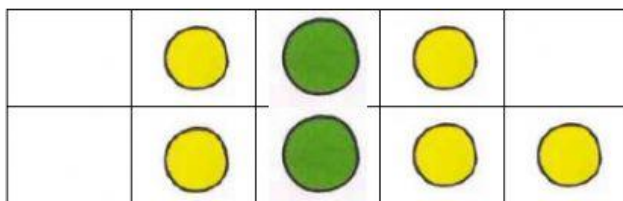


HOW MANY DO WE ADD TO MAKE 10?

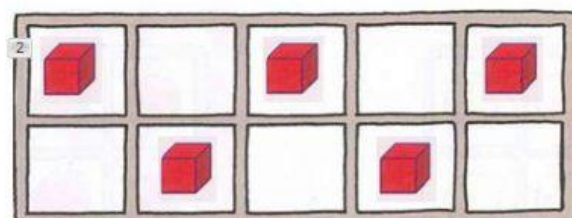
(ta thêm bao nhiêu để được 10?)




We add __ to make 10.



We add __ to make 10.




We add __ to make 10.



We add __ to make 10.



We add __ to make 10.



We add __ to make 10.

MS.YEN – ENGLISH

🏠 135B/3 Le Quang Dinh, Thang Nhat Ward, Vung Tau city.
☎ 0909.155.437 – 📧 Ms.Yen – English/ Nguyen Ngo Yen Tuyet.