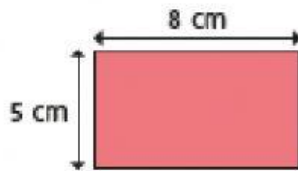
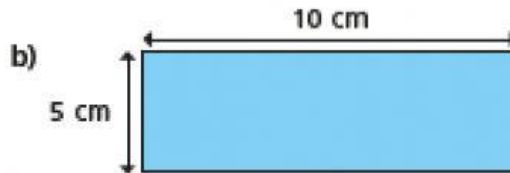
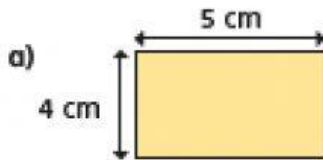


1. Tommy is working out the perimeter of some rectangles.

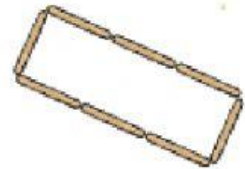


$$8 \text{ cm} + 5 \text{ cm} = 13 \text{ cm}$$
$$13 \text{ cm} \times 2 = 26 \text{ cm}$$

Use Tommy's method to find the perimeter of these rectangles.

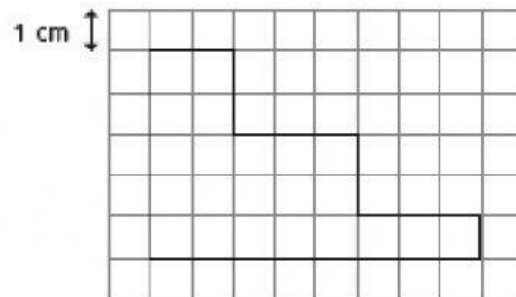


2. Each lolly stick is 8 cm long. Find the perimeter of the shape.



Answer: _____ cm

3. Work out the perimeter of this shape



Answer: _____ cm

4. How much bigger is Alice's patio bigger than Dorothy's?

Answer: _____ sq metres

