

WHAT'S THE TIME MR WOLF? QUARTER HOUR

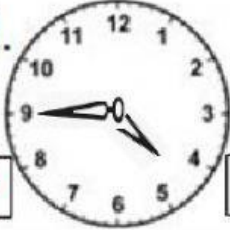

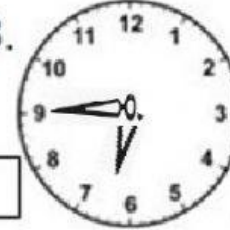
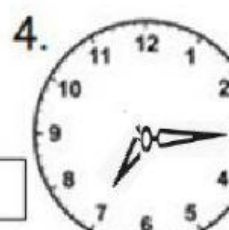
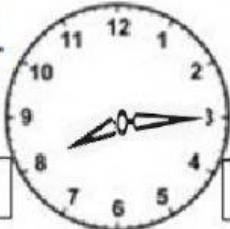
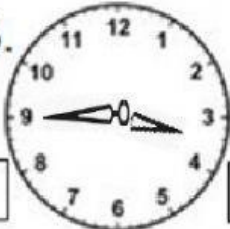
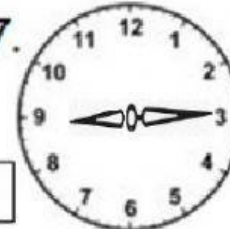
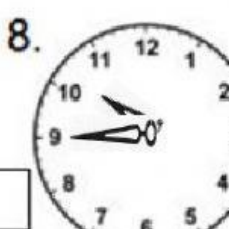

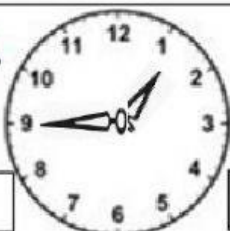
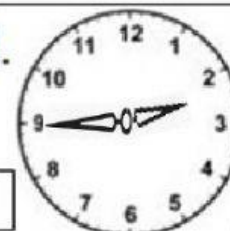



LI: Order and compare time by counting whole numbers of units

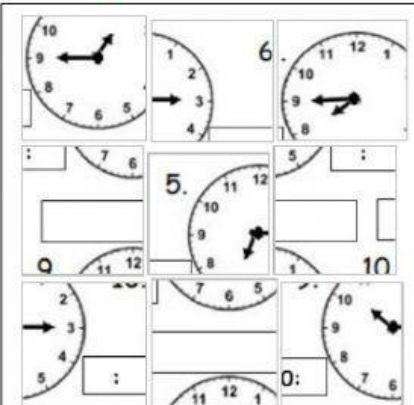
SC: I can tell time to the half hour using analogue and digital clocks

I can directly compare analogue and digital time

Write the digital time in the box beside each clock and the analogue time in the box below each clock. The some have been done for you

1. 	2. 	3. 	4. 
<div>4:45</div>	:	:	:
<div>four forty-five</div>			
5. 	6. 	7. 	8. 
:	:	:	:
9. 	10. 	11. 	12. 
:	:	:	:

Challenge: Sort out the mixed up clocks. There are sixteen pieces



Short Trip

Hine caught a bus from Ruatoria to Te Puia Springs. The trip took 30 minutes. If the bus left Ruatoria at 9:15am, what time did it arrive in Te Puia Springs?

Drag the clock parts here and put them in order.

