

Sarasas Pattana School

Exercise




















Subject: Mathematics

Topic: Comparing Fractions

Grade 3 (ABP)

Name: _____ **Class:** _____ **No:** _____

Directions: Compare the fractions and choose $<$, $>$ and $=$ in the box.

1.  <input data-bbox="547 786 619 831" type="text"/> 	6.  <input data-bbox="970 786 1042 831" type="text"/> 
2.  <input data-bbox="547 965 619 1010" type="text"/> 	7.  <input data-bbox="970 965 1042 1010" type="text"/> 
3.  <input data-bbox="547 1155 619 1200" type="text"/> 	8.  <input data-bbox="970 1155 1042 1200" type="text"/> 
4.  <input data-bbox="547 1335 619 1379" type="text"/> 	9.  <input data-bbox="970 1335 1042 1379" type="text"/> 
5.  <input data-bbox="547 1514 619 1559" type="text"/> 	10.  <input data-bbox="970 1514 1042 1559" type="text"/> 