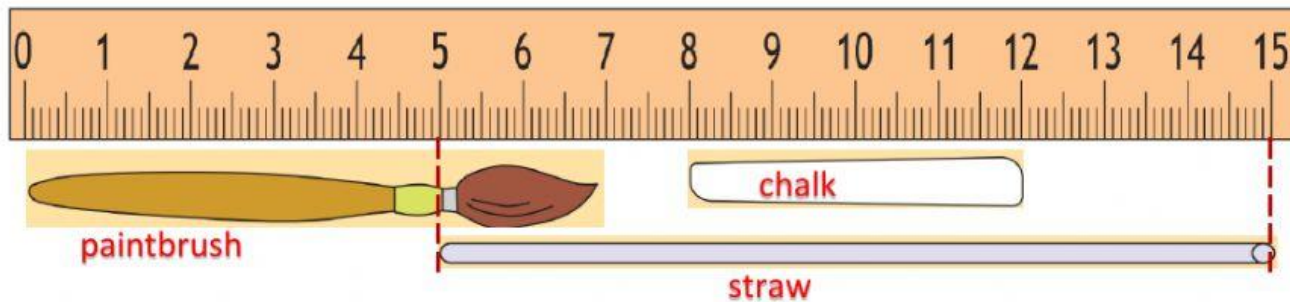


Name _____

Class2/


No. _____



- The paintbrush is ____ cm.
- The chalk is ____ cm.
- The straw is ____ cm.
- The straw is ____ than the paintbrush
- The straw is the ____
- The chalk is the ____
- The chalk is ____ than the straw

Conversion

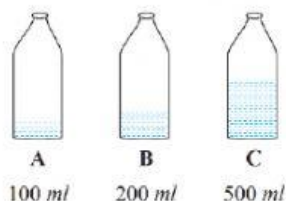
- 5 m = ____ cm
- 250 cm = ____ m ____ cm
- 45 cm + 25 cm = ____ cm
- 78 cm - 15 cm = ____ cm



Mass

- Which fruit is the heaviest?
- Which fruit is the lightest?
- Which fruit is lighter than the orange?
- Which fruit is heavier than the orange?
- 150g + 100g =
- 900g - 150g =

Volume



- Which bottle holds the most?
- Which bottle holds the least?
- How much more should add to C to make 1 litre?