


## Making Pictograms

# PICTOGRAMS

## Part 4

Sarah loves animals. She helps out an animal shelter on weekends. Below is a picture of the animals at the shelter.














































A) Choose the correct answer to complete the table below.

Animal	Number of Animals
Kitten	
Bird	
Rabbit	
Hamster	

B) In the pictogram below, show the number of animals at the shelter.

Choose and click the correct answer.

### Animals at the Shelter

<p>Kitten</p> 	<div data-bbox="502 517 879 636"></div> <div data-bbox="502 665 995 775"></div>
<p>Bird</p> 	<div data-bbox="502 826 995 936"></div> <div data-bbox="502 958 879 1072"></div>
<p>Rabbit</p> 	<div data-bbox="502 1115 1356 1225"></div> <div data-bbox="502 1252 1238 1361"></div>
<p>Hamster</p> 	<div data-bbox="502 1417 1256 1527"></div> <div data-bbox="502 1554 1125 1664"></div>
<p>Each  stands for 2 animals.</p>	