



ADDITION



$$\underline{\hspace{2cm}} + \underline{\hspace{2cm}} = \underline{\hspace{2cm}}$$



$$\underline{\hspace{2cm}} + \underline{\hspace{2cm}} = \underline{\hspace{2cm}}$$



$$\underline{\hspace{2cm}} + \underline{\hspace{2cm}} = \underline{\hspace{2cm}}$$



$$\underline{\hspace{2cm}} + \underline{\hspace{2cm}} = \underline{\hspace{2cm}}$$



$$\underline{\hspace{2cm}} + \underline{\hspace{2cm}} = \underline{\hspace{2cm}}$$

ADDITION



+



=



+



=



+



=



+



=



+




=

Match the picture with the correct stage of the butterfly life cycle.



Caterpillar



Egg

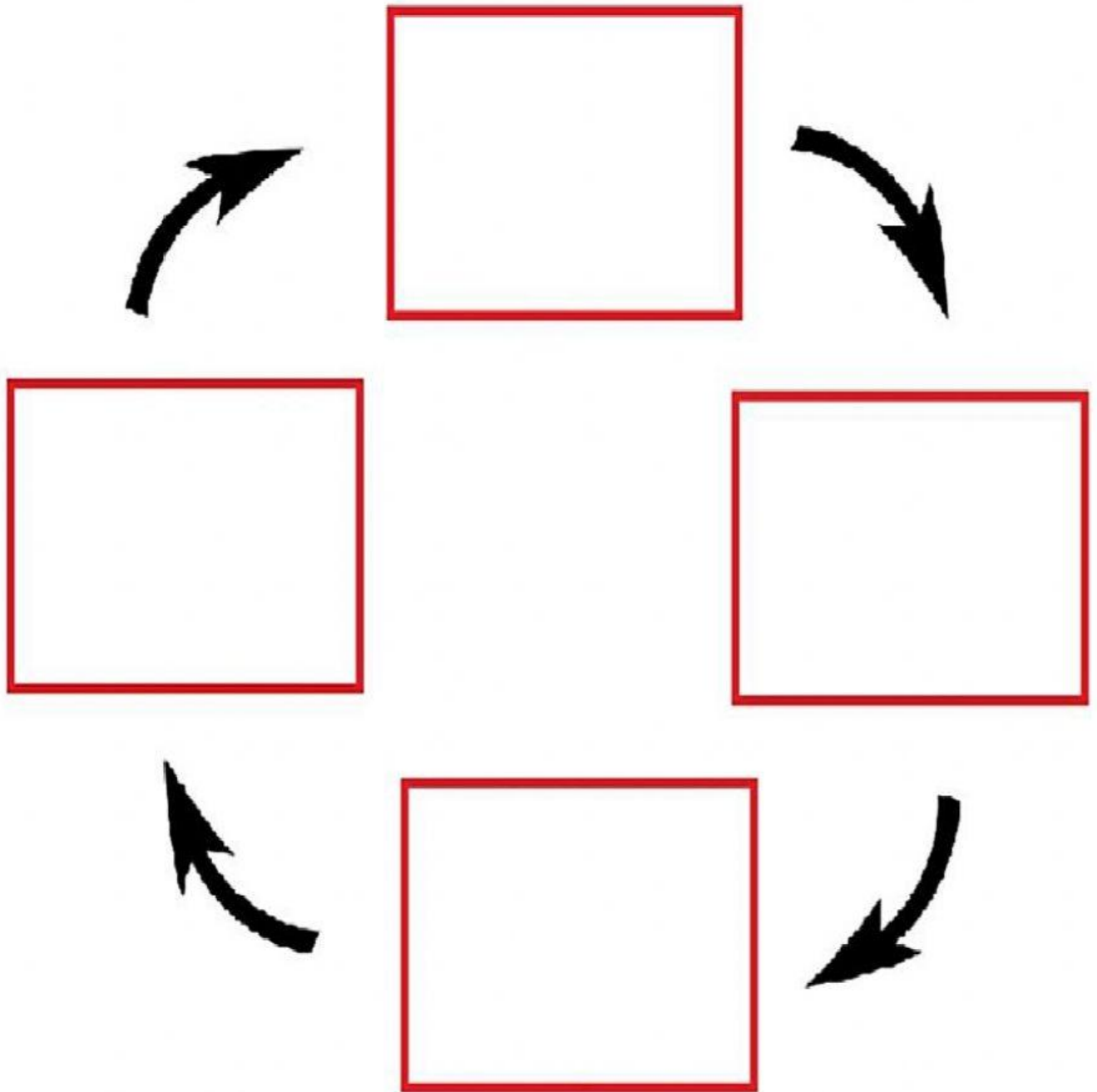


Butterfly

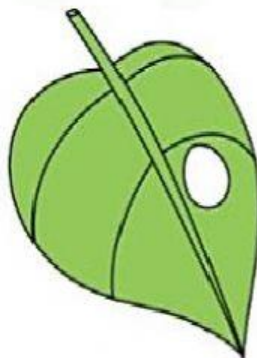


Pupa


Listen and choose the correct answer.



Butterfly



Egg



Caterpillar



Pupa