



## Money Practice #8

1. Drag and drop the coins in order of least to greatest value.



Least

Between

Greatest

2. Write the value and then add.











$$\begin{array}{r} 6 \text{ (penny)} = \$ .00 \\ 4 \text{ (dime)} = + \$ .00 \\ \hline \$ .00 \end{array}$$

$$\begin{array}{r} 3 \text{ (dime)} = \$ .00 \\ 7 \text{ (penny)} = + \$ .00 \\ \hline \$ .00 \end{array}$$

$$\begin{array}{r} 4 \text{ (nickel)} = \$ .00 \\ 16 \text{ (penny)} = + \$ .00 \\ \hline \$ .00 \end{array}$$

$$\begin{array}{r} 1 \text{ (nickel)} = \$ .00 \\ 8 \text{ (dime)} = + \$ .00 \\ \hline \$ .00 \end{array}$$

3. You bought the following items.

 <b>\$25</b>	<p>You paid \$30. What's your change?</p> <p><input type="text"/> - <input type="text"/> = \$ <input type="text"/></p> <p>Choose your change.</p> <div></div>
 <b>\$16</b>	<p>You paid \$20. What's your change?</p> <p><input type="text"/> - <input type="text"/> = \$ <input type="text"/></p> <p>Choose your change.</p> <div></div>