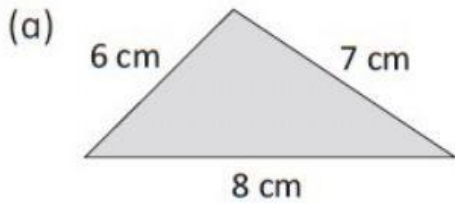
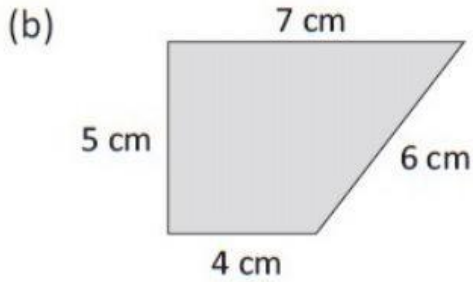


2. Find the perimeter of each figure.
Give your answers in the correct units.



$$\text{Perimeter} = \underline{\hspace{1cm}} + \underline{\hspace{1cm}} + \underline{\hspace{1cm}}$$

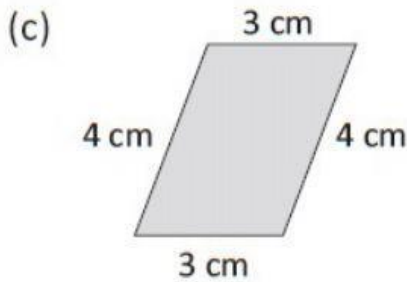
$$= \underline{\hspace{2cm}}$$



$$\text{Perimeter} = \underline{\hspace{1cm}} + \underline{\hspace{1cm}}$$

$$+ \underline{\hspace{1cm}} + \underline{\hspace{1cm}}$$

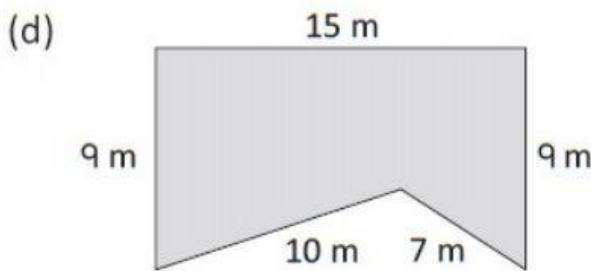
$$= \underline{\hspace{2cm}}$$



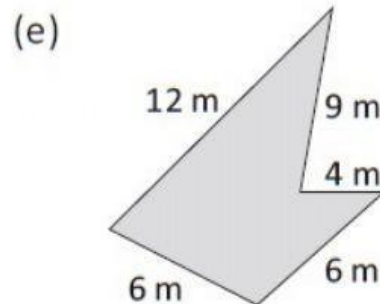
$$\text{Perimeter} = \underline{\hspace{1cm}} + \underline{\hspace{1cm}}$$

$$+ \underline{\hspace{1cm}} + \underline{\hspace{1cm}}$$

$$= \underline{\hspace{2cm}}$$



$$\text{Perimeter} = \underline{\hspace{2cm}}$$



$$\text{Perimeter} = \underline{\hspace{2cm}}$$