

**ISM INTERNATIONAL ACADEMY
MATH TEST
BLOCK 1
2020-2021
THIRD GRADES H-I
Ma. Jose Crespo, Erika Tapia**

1. Count by ones

						151				
--	--	--	--	--	--	-----	--	--	--	--



						99					104
--	--	--	--	--	--	----	--	--	--	--	-----

2. Write the before and after numbers by ones.


	73	
--	----	--

	56	
--	----	--

	25	
--	----	--


To Represent monetary amounts with the use of coins and bills.

3. Draw lines to match the cents with the object they will buy



To recognize and differentiate even and odd numbers.

4. Click on even numbers.



5. Write the times.

 :

 :

 :

 :
6. Number the raccoons.

 1st
first

 nd
second

 rd
third

 th
fourth

 th
fifth

7. Count by tens.

10									100
110									200

8. How many coins and bills.

(_____/10pts)

70¢ = ____



50¢ = ____



\$70.00 = ____



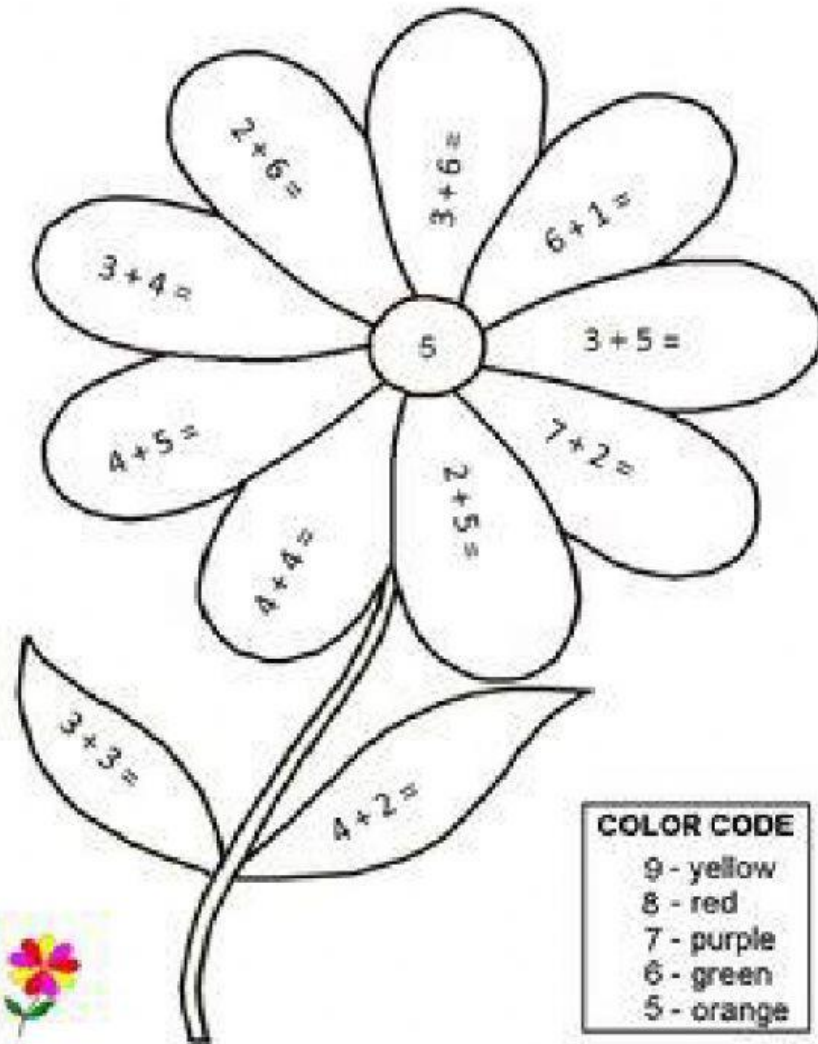
\$50.00 = ____



\$8.00 = ____



1. Solve the additions and choose the color according to the key color.



Click on the correct answer.

