

Name: _____



The Faces of Solids

Drag and drop the names of the following solid to match their 2D faces.

Triangular prism

Cylinder

Cuboid

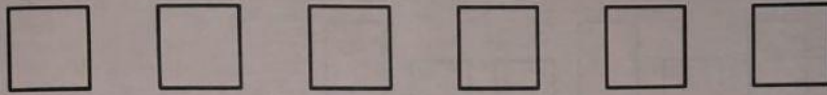
Square base pyramid

Cube

Triangular base pyramid

The shapes in each set are the **FACES OF SOLIDS**.
Write the name of each **SOLID**.

1.



Answer: _____

2.




Answer: _____

3.




Answer: _____

4.



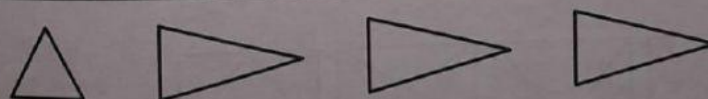
Answer: _____

5.



Answer: _____

6.



Answer: _____