

Add and Subtract 10s

4a. Cross out the counters that need to be subtracted to match the calculation.
Record your answer in the column format.

$$43 - 30 = 13$$

T	O
● ● ● ●	● ● ●



PS

Add and Subtract 10s

4b. Cross out the counters that need to be subtracted to match the calculation.
Record your answer in the column format.

$$75 - 40 = 35$$

T	O
● ● ● ● ●	● ● ● ●



PS

5a. Katie is given a problem:

I have 24
sweets and I
am given 30
more.

	2	4
+	3	0
	5	0



This is her calculation.
Is she correct? Explain why.



PS

5b. Noah is given a problem:

I have 46
strawberries
and I eat 20
of them.

	4	6
-	2	0
	6	6



This is his calculation.
Is he correct? Explain why.

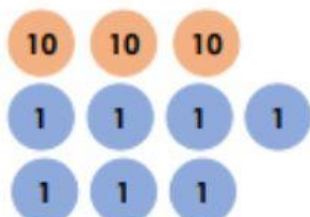
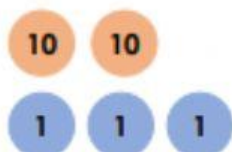


PS

6a. Insert the correct symbols in the boxes below.

	2	3
	1	0
	1	3

	3	7
	2	0
	5	7

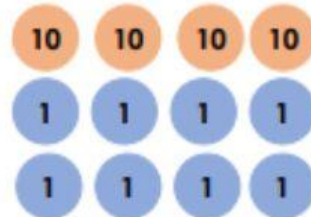
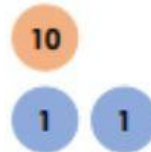


R

6b. Insert the correct symbols in the boxes below.

	1	2
	3	0
	4	2

	4	8
	3	0
	1	8



R