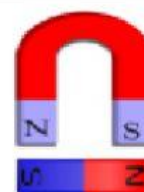


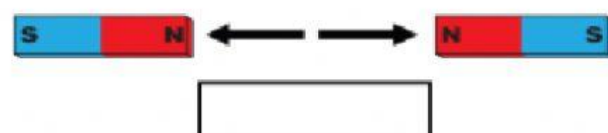
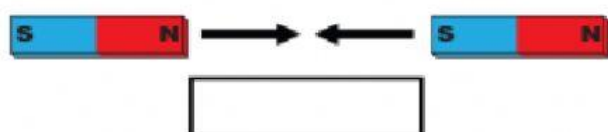
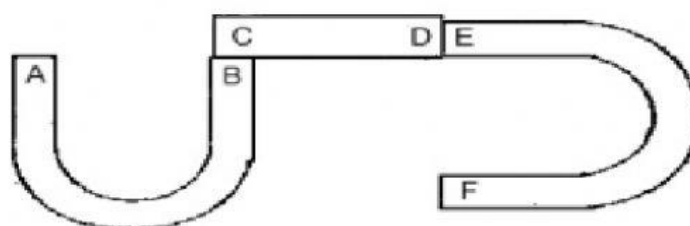


Law of magnetism

A. Write the law of magnetism in the boxes.



B. Look at this picture. Write the name of magnet poles.



If "A" is the "North-pole" of the magnet, what pole will B, C, D, E and F be? *North Pole or South Pole?*

A = North-pole C = E =

B = D = F =

If "A" is the "South-pole" of the magnet, what pole will B, C, D, E and F be? *North Pole or South Pole?*

A = South-pole C = E =

B = D = F =