

Name: _____

Date: _____

Multiplication Sentences

1 Write the missing numbers.

(a)



3 groups of

$2 + 2 + 2 =$

$3 \times 2 =$

Recall that 3 twos
is the same as 3
groups of 2.



(b)

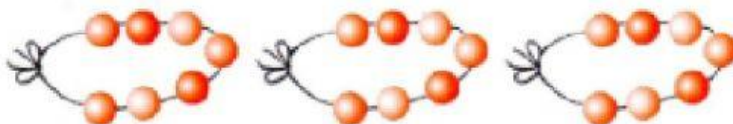


2 groups of

$6 + 6 =$

$2 \times 6 =$

(c)



3 groups of

+ + =

$3 \times$ =

2 Complete the multiplication stories.

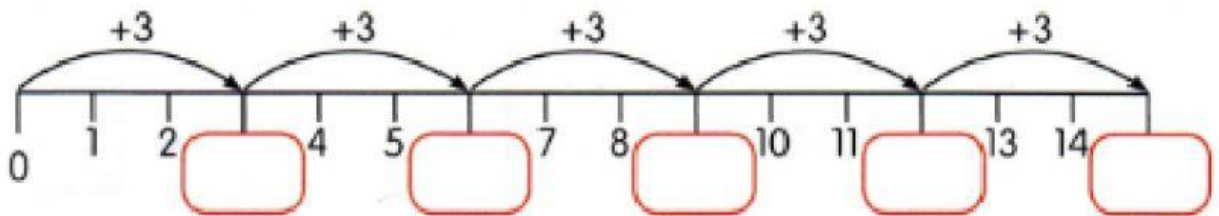
(a)



There are _____ holders.

Each holder has _____ toothbrushes.

$$\begin{aligned} \square \times \square &= \square + \square + \square + \square + \square \\ &= \square \end{aligned}$$



There are _____ toothbrushes altogether.

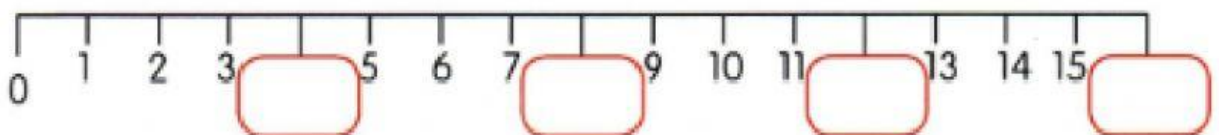
(b)



There are _____ plates.

Each plate has _____ cookies.

$$\begin{aligned} \square \times \square &= \square + \square + \square + \square \\ &= \square \end{aligned}$$



There are _____ cookies altogether.

3 Match.

(a) $2 + 2 + 2 + 2 + 2$ • • 3×7

(b) $7 + 7 + 7$ • • 6×3

(c) $4 + 4$ • • 4×5

(d) $5 + 5 + 5 + 5$ • • 6×6

(e) $3 + 3 + 3 + 3 + 3 + 3$ • • 5×2

(f) $6 + 6 + 6 + 6 + 6 + 6$ • • 2×4

Self reflection

How did you do the worksheet?

(write A/B/C)



A. I did it by myself

B. I did it with a little help

C. I did it with a lot of help