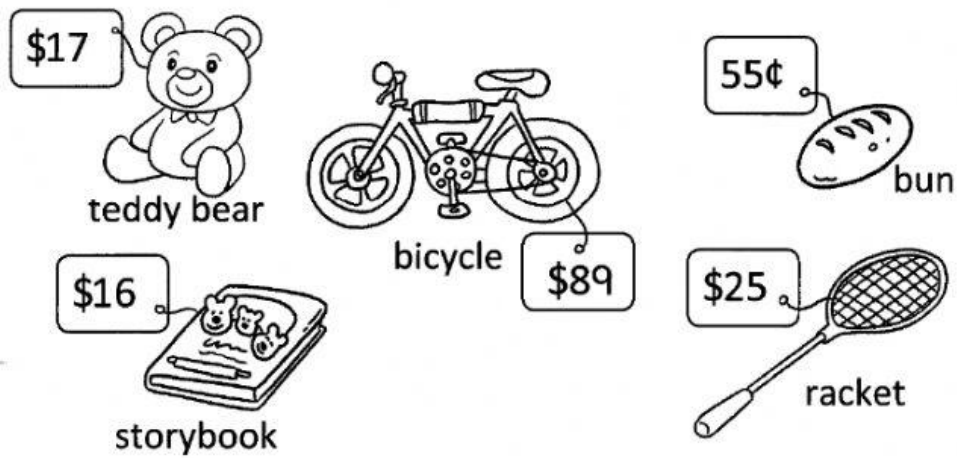
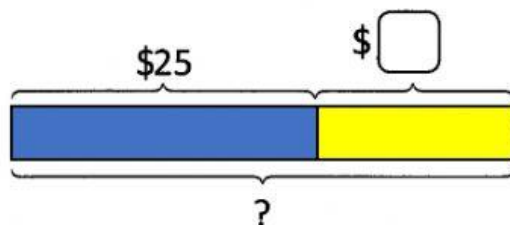


Thursday, 28th October 2021 Name: _____

1. It's shopping time!



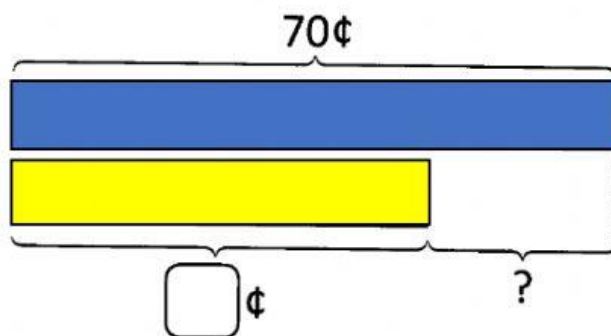
(a) Ali buys a racket and a teddy bear.
How much does he spend altogether?



$$\$25 + \$\underline{\hspace{2cm}} = \$\underline{\hspace{2cm}}$$

He spends \$_____ altogether.

- (b) Aishah buys a bun.
She gives the cashier 70¢.
How much change does she get?



$$70¢ - \underline{\hspace{2cm}} ¢ = \underline{\hspace{2cm}} ¢$$

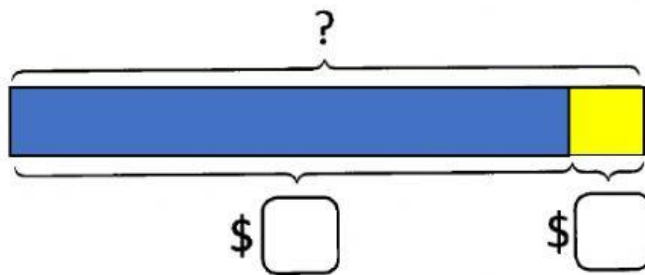
She gets ¢ change.

- (c) After buying a bicycle, Ishak has \$11 left.
How much did he have at first?

bicycle



(change)



$$\text{\$} \underline{\hspace{2cm}} + \text{\$} \underline{\hspace{2cm}} = \text{\$} \underline{\hspace{2cm}}$$

He had \$ at first.