

SEVILLA PRIVATE PRIMARY SCHOOL

INFANT 2- TERM I

Weekly Test

Week 8

SPELLING

Select the correct spelling of the word being called out for each number.

1.	stons	stones
2.	tale	tail
3.	fue	few
4.	makes	maks
5.	owt	out
6.	ruler	rulr
7.	afternun	afternoon
8.	ape	appe
9.	cuet	cute
10.	music	moosic

SCIENCE

Animal Homes

Choose the words to correctly complete each sentence.

1. A habitat is made up _____.
2. An example of a living thing is _____.
3. A non- living thing is _____.
4. A water home is also called an _____.
5. A land home is also called a _____.

Drag the pictures to their correct names to show the kind of home they

are.



Water Home	Land Home

AGRICULTURAL SCIENCE

Plants- Roots





Choose the correct answers for each sentences.

1. Roots of plants can grow in 4 different materials:

soil glass manure plastic water air

Drag the name to each box for the type of roots shown.

water soil manure air

Name of material				
Picture of roots				

Plants- Pots



Choose the correct answers for each sentences.

1. Good pots for our plants are

broken clean has holes dirty not broken

Drag the picture of the pots in the correct places.



V.C.C.E.

Sharing Information

Choose the correct answers for each question.

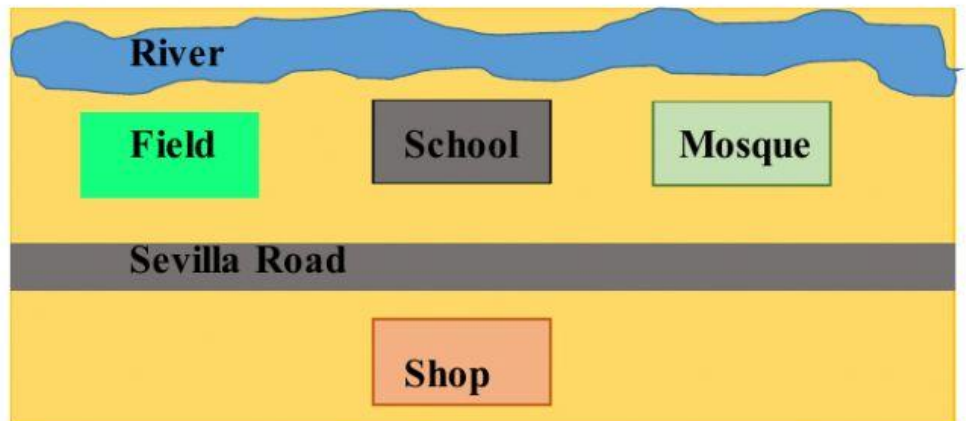
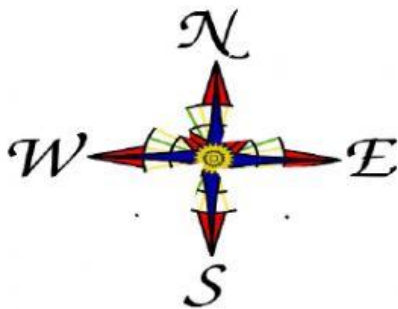
1. Some things that happen at home we can share it with people who we
 - a. Trust
 - b. do not trust
2. Some persons we can share with are
 - a. Teachers
 - b. Friends or family
 - c. Strangers
3. Some things we can share are
 - a. Personal details
 - b. funny
 - c. our likes

4. Things we do not share are

- a. Things we do not like b. hiding places c. your address

SOCIAL STUDIES
Look at the map below.

Use the map to give the correct directions to complete each sentence.



1. The river is _____.
2. The field is _____.
3. The school is _____.
4. The mosque is _____.

CELEBRATIONS

All Saints and All Souls Day

Select the correct answer to complete each sentence below.

1. Both days are celebrated by _____.

2. All Saints Day is celebrated on _____ every year.

3. _____ is celebrated on November 2nd every year.

4. On this day we _____ to show love and
respect for our loved ones who we _____.

THE END!!