


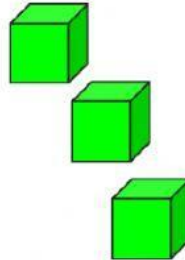
# Grade 1 October Assessment Concept

## More, Less, and Equal to

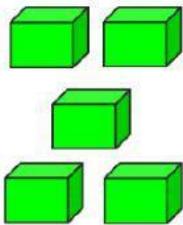

Click on the correct symbol.



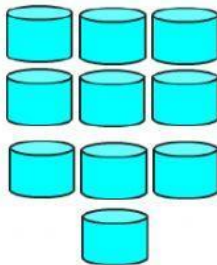
$>$   
 $<$   
 $=$




$>$   
 $<$   
 $=$



$>$   
 $<$   
 $=$



$>$   
 $<$   
 $=$



## Ordinal Numbers

Select the third float.



Select the fifth chair.



Select the first coconut.



## Least to Greatest

🔊 Arrange the numbers in order from least to greatest.

0 1 2 3 4 5 6 7 8 9 10 11 12 13 14 15 16 17 18 19 20

7	1	9	5

3	8	0	2

17	12	11	15

16	14	20	13

## Time to the Hour

🔊 Type in the correct time.



o'clock



o'clock



o'clock



o'clock