



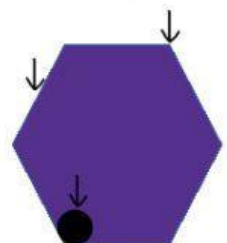
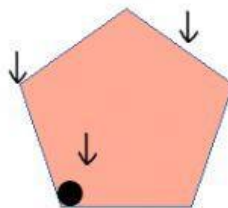
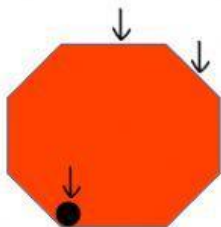


Escribe cómo se llaman los siguientes polígonos:



Arrastra cada nombre donde corresponda:



VÉRTICES
LADOS
ÁNGULOS

VÉRTICES
LADOS
ÁNGULOS

VÉRTICES
LADOS
ÁNGULOS