

Name: \_\_\_\_\_

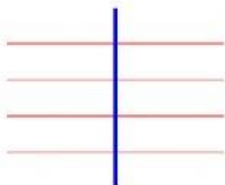
Homeroom: \_\_\_\_\_

Date: \_\_\_\_\_

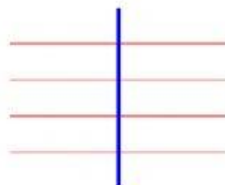
**2    3    5    7    11    13    17    19    23    29    31    37**

Express the following numbers as product of prime factors.


1.  $12 =$  \_\_\_\_\_



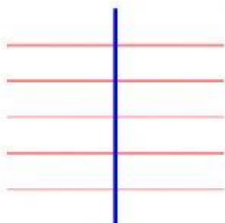
2.  $16 =$  \_\_\_\_\_



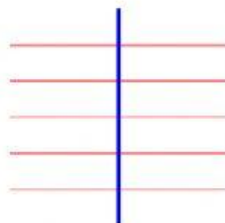
3.  $20 =$  \_\_\_\_\_



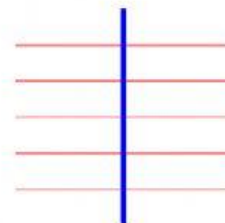
4.  $24 =$  \_\_\_\_\_




5.  $28 =$  \_\_\_\_\_



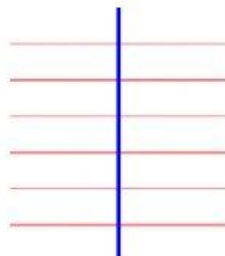
6.  $30 =$  \_\_\_\_\_




7.  $32 =$  \_\_\_\_\_




8.  $36 =$  \_\_\_\_\_




9.  $40 =$  \_\_\_\_\_



10.  $42 =$  \_\_\_\_\_



11.  $44 =$  \_\_\_\_\_



12.  $50 =$  \_\_\_\_\_

