



# REALIZA LAS SUMAS Y RESTAS CON LOS PERSONAJES DEL CASTILLO



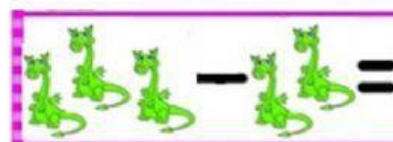
$$\square + \square = \square$$




$$\square - \square = \square$$



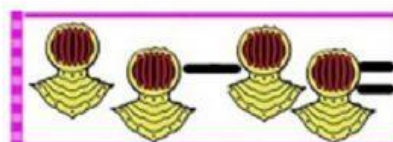
$$\square + \square = \square$$



$$\square - \square = \square$$



$$\square + \square = \square$$



$$\square - \square = \square$$