


**Part 1: Choose the correct answer and write the letter (A, B, C or D) in the answer box provided.**

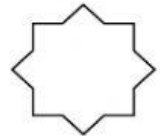
1. What should we do to stop harmful bacteria from entering our body?

- A. Buy and eat foods from dirty stalls.
- B. Share personal belongings with other people.
- C. Wash our hands and keep our body clean.
- D. Throw rubbish everywhere.




2. Majid stirred hot soup with a metal spoon. He noticed that the spoon gained heat very quickly. Which best describes the property of the spoon?

- A. It is magnetic.
- B. It is a poor conductor of heat.
- C. It is soluble in water.
- D. It is a good conductor of heat.




3. \_\_\_\_\_ materials are materials that are not attracted to a magnet.

- A. Non-conductor
- B. Conductor
- C. Non-magnetic
- D. Magnetic



4. Which of the following is true about amphibians?

- A. The young take in oxygen using gills.
- B. The adults give birth to live young.
- C. They have a body covered with scales.
- D. They spend all of their lives in water.




5. Why the animals in Figure 1 below, are classified into the same group?




Figure 1

- A. They have two body parts and six legs.
- B. They have three legs and six body parts.
- C. They have three body parts and six legs.
- D. They have two body parts and eight legs.



6. If the material can be bend or stretch, it is called \_\_\_\_\_.
- A. fragile      B. flexible      C. portable      D. conductor



7. Which of the following in Figure 2 lay eggs in the ground?

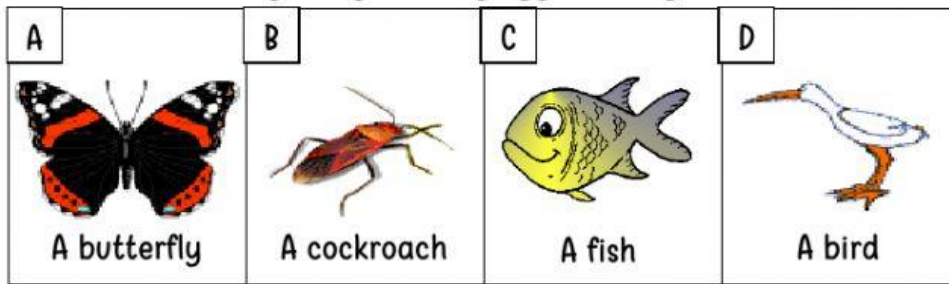




Figure 2



8. \_\_\_\_\_ is an example of a transparent object.
- A. A frosted glass      B. A glass bottle      C. An iron bar      D. Oil




9. The table below shows two groups of animals.

| Birds    | Mammals    |
|----------|------------|
| Ostrich  | Whale      |
| Bat      | Platypus   |
| Penguin  | Polar Bear |
| Hornbill | Leopard    |


Which of the following animals has been grouped wrongly?

- A. Platypus      B. Whale      C. Penguin      D. Bat




10. There are three parts of an insect which are \_\_\_\_\_.

- A. Thorax, legs and tail  
B. Head, thorax and abdomen  
C. Head, body and legs  
D. Head, thorax and wings




11. Why do we use a clear glass for our car windscreen?

- A. It is because it allows most light to pass through it.  
B. It is because it only allows some light to pass through it.  
C. It is because it does not allow any light to pass through it.  
D. It is because it is very strong and cannot break easily.



12. Which of the following materials is best suited for making a knife?

- A. Metal      B. Rubber      C. Glass      D. Wood



13. In Figure 3, the part labeled X is used for \_\_\_\_\_.

- A. breathing
- B. pushing
- C. reproducing
- D. swimming






Figure 3




14. The process of heat energy flowing in a material is called as \_\_\_\_\_.

- A. transpiration
- B. conduction
- C. respiration
- D. photosynthesis




15. Identify three things needed by a plant in order to live in a habitat.

- A. Animals, sunlight and water
- B. Shelter, water and animals
- C. Sunlight, nutrients and shelter
- D. Sunlight, water and nutrients




16. Which of the following animals have scales as body covering?

- A. Ladybug
- B. Pelican
- C. Camel
- D. Guppy



17. Which of the following is natural habitat?

- A. A cage
- B. A house
- C. A kennel
- D. A pond



18. Figure 4 shows two different animals.



Bat




Platypus

Figure 4

Which of the following statement is **correct** about these two animals?

|    | Similarity                          | Differences                                  |
|----|-------------------------------------|--|
| A. | Their bodies are covered with furs. | Bats give birth while platypuses lay eggs.   |
| B. | They are warm blooded.              | Bats lay eggs while platypuses give birth.   |
| C. | They reproduce by giving birth.     | Bats are mammals while platypuses are birds. |
| D. | They lay eggs.                      | Bats are birds while platypuses are mammals. |





19. Look at the two pictures in Figure 5 below.





Figure 5


How are the above organisms similar?

- A. They can make their own food.
- B. They belong to the same group called fungi.
- C. They do not need air, food and water to survive.
- D. They can move freely on their own from place to place.

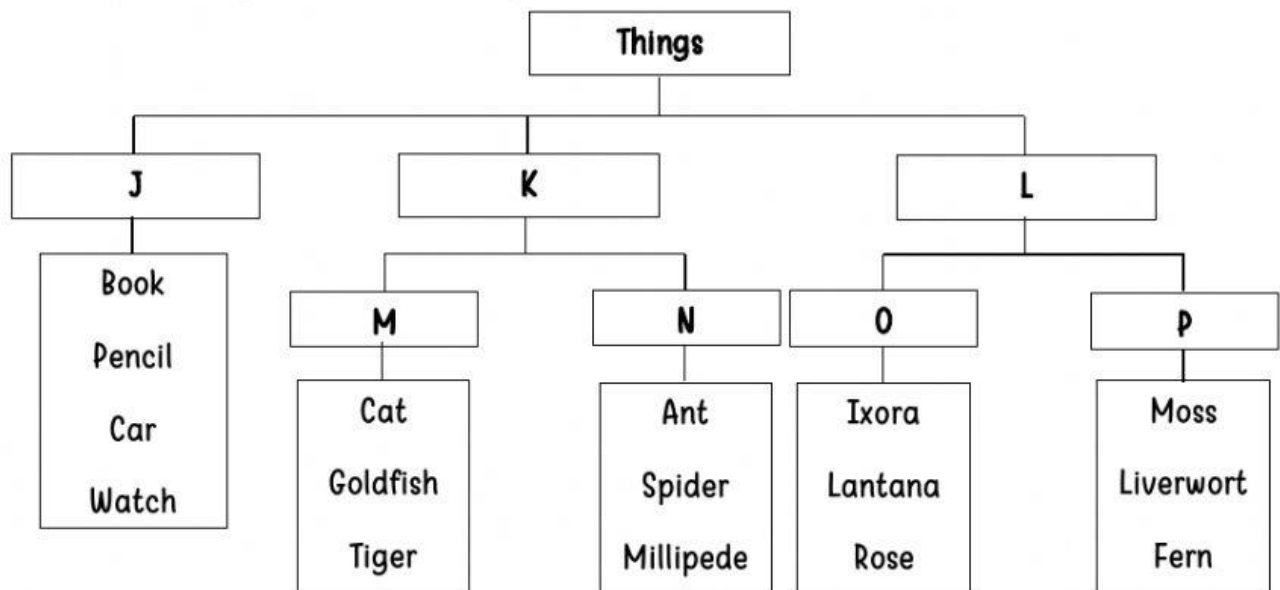


20. Ceramic can be used to make all of the following except \_\_\_\_\_.

- A. curtains
- B. plates
- C. pots
- D. tiles



Part 2: Study the diagram below carefully.



Name the groups:

J : \_\_\_\_\_

K : \_\_\_\_\_

L : \_\_\_\_\_

M : \_\_\_\_\_

N : \_\_\_\_\_

O : \_\_\_\_\_

P : \_\_\_\_\_