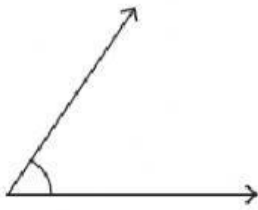


# Identifying the Types of Angles

T151

Identify angles as acute, obtuse, straight, or right. Write the name on the line

1)



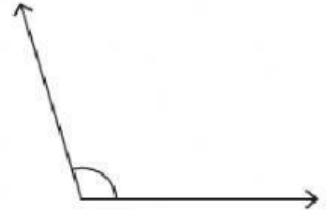
\_\_\_\_\_

2)



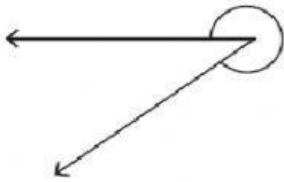
\_\_\_\_\_

3)



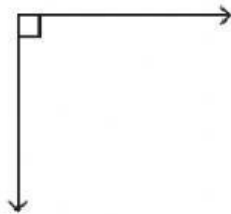
\_\_\_\_\_

4)



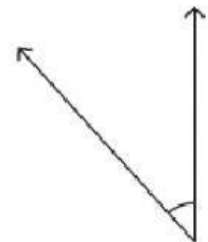
\_\_\_\_\_

5)




\_\_\_\_\_

6)



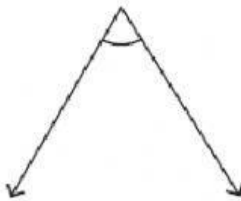
\_\_\_\_\_

7)



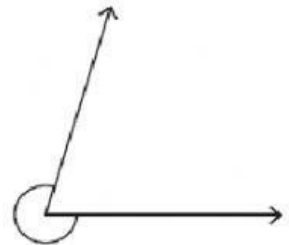
\_\_\_\_\_

8)



\_\_\_\_\_

9)



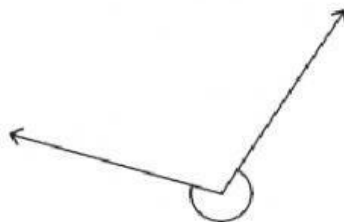
\_\_\_\_\_

10)



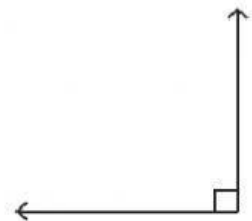
\_\_\_\_\_

11)



\_\_\_\_\_

12)



\_\_\_\_\_

1. This is a(n):

- a. right angle.
- b. straight angle.
- c. acute angle.
- d. obtuse angle.



2. This is a(n):

- a. right angle.
- b. straight angle.
- c. acute angle.
- d. obtuse angle.



3. This is a(n):

- a. right angle.
- b. straight angle.
- c. acute angle.
- d. obtuse angle.



4. This is a(n):

- a. right angle.
- b. straight angle.
- c. acute angle.
- d. obtuse angle.



5. This is a(n):

- a. right angle.
- b. straight angle.
- c. acute angle.
- d. obtuse angle.



6. This is a(n):

- a. right angle.
- b. straight angle.
- c. acute angle.
- d. obtuse angle.



7. This is a(n):

- a. right angle.
- b. straight angle.
- c. acute angle.
- d. obtuse angle.



8. This is a(n):

- a. right angle.
- b. straight angle.
- c. acute angle.
- d. obtuse angle.



9. This is a(n):

- a. right angle.
- b. straight angle.
- c. acute angle.
- d. obtuse angle.



10. This is a(n):

- a. right angle.
- b. straight angle.
- c. acute angle.
- d. obtuse angle.

