


Nome _____

Data _____

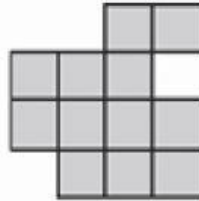
Oficina de Matemática - Year 5

1)




Perímetro _____
Área _____

2)




Perímetro _____
Área _____

3)



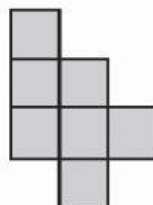
Perímetro _____
Área _____

4)



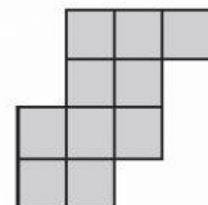
Perímetro _____
Área _____

5)




Perímetro _____
Área _____

6)




Perímetro _____
Área _____

7)




Perímetro _____
Área _____

8)



Perímetro _____
Área _____

9)



Perímetro _____
Área _____