

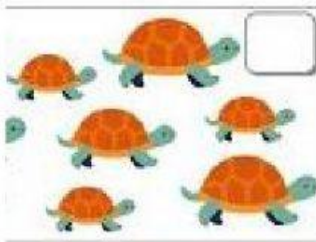


Nombre:

OBSERVA LAS IMÁGENES, QUE NUMERO FALTA?
CUENTA LAS COLECCIONES Y RESUELVE LA SUMA

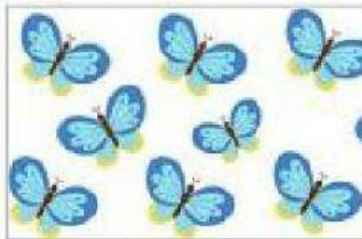


$$\begin{array}{r} 10 \\ + \quad \square \\ \hline \end{array}$$



$$\begin{array}{r} \square \\ + \quad 8 \\ \hline \end{array}$$

= 16



= 14

$$\begin{array}{r} \square 9 \\ + \quad \square 9 \\ \hline = \square \end{array}$$

